



Prénom :

Niveau 2




Acheter chez le marchand : calculer une somme d'argent (< 50), prévoir juste ce qu'il faut pour payer.

Série 1 : les fruits

Écris le calcul et dessine les billets et pièces.


1




2




3




4



5




6



Série 2 : les chaussures

Écris le calcul et dessine les billets et pièces.


1



2



3



4



5



6





Prénom :

Niveau 2



Acheter chez le marchand : calculer une somme d'argent (< 50), prévoir juste ce qu'il faut pour payer.

Série 3 : les friandises

Écris le calcul et dessine les billets et pièces.

1



2



3



4



5



6



Série 4 : les fournitures scolaires

Écris le calcul et dessine les billets et pièces.

1



2



3



4



5



6





Prénom :

Niveau 2




Acheter chez le marchand : calculer une somme d'argent (< 50), prévoir juste ce qu'il faut pour payer.


Série 5 : les légumes

Écris le calcul et dessine les billets et pièces.


1




2




3




4



5



6



Série 6 : les boissons

Écris le calcul et dessine les billets et pièces.

1



2



3



4



5



6





Correction

Niveau 2

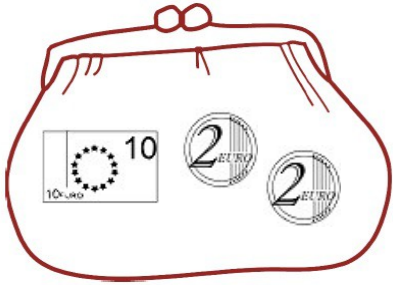


Acheter chez le marchand : calculer une somme d'argent (< 50), prévoir juste ce qu'il faut pour payer.

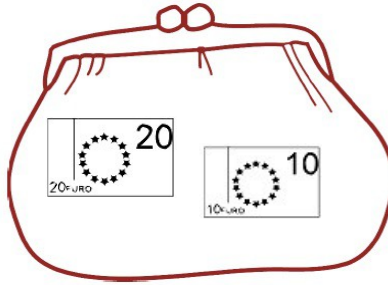
Série 1 : les fruits

Écris le calcul et dessine les billets et pièces.

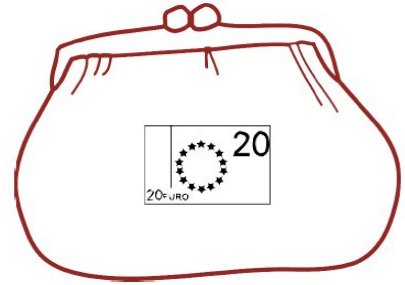
1 $8 + 6 = 14$



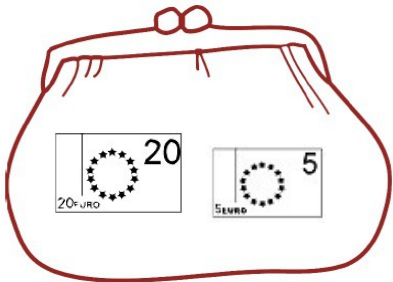
2 $10 + 10 + 10 = 30$



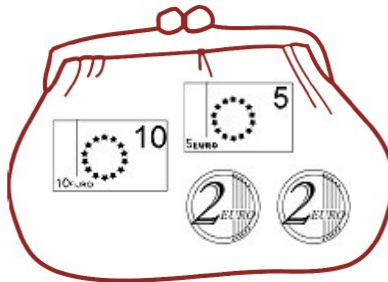
3 $9 + 7 + 4 = 20$



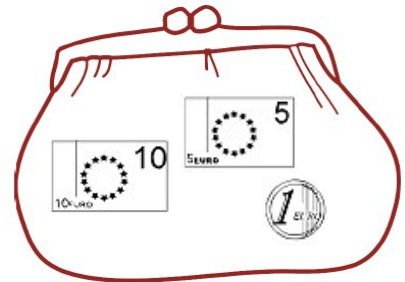
4 $5 + 5 + 5 + 5 + 5 = 25$



5 $7 + 7 + 5 = 19$



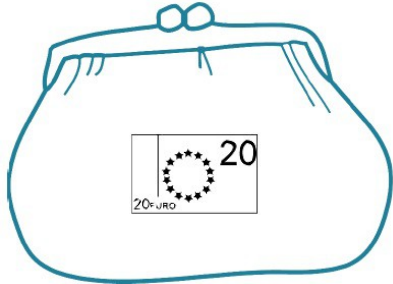
6 $2 + 2 + 2 + 2 + 2 + 2 + 2 + 2 = 16$



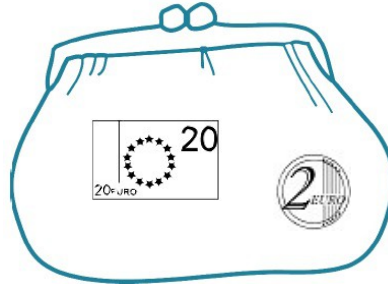
Série 2 : les chaussures

Écris le calcul et dessine les billets et pièces.

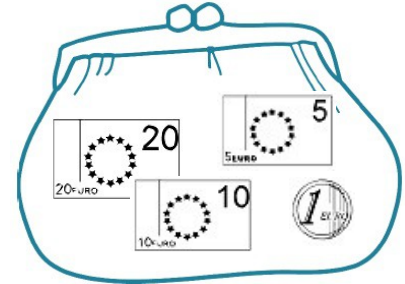
1 $2 + 2 + 2 + 2 + 2 + 2 + 2 + 2 + 2 + 2 = 20$



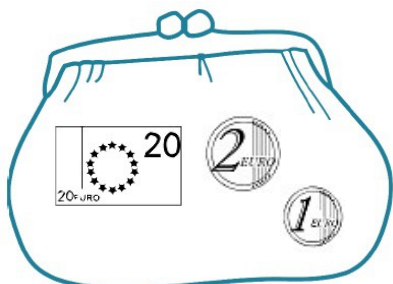
2 $4 + 4 + 7 + 7 = 22$




3 $10 + 10 + 10 + 6 = 36$



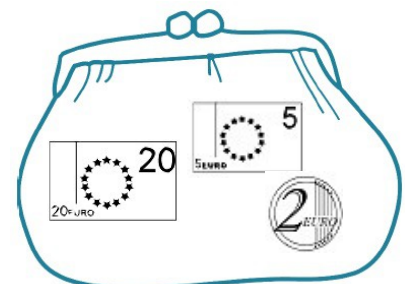
4 $8 + 8 + 6 + 1 = 23$



5 $7 + 3 + 6 + 4 = 20$



6 $10 + 10 + 4 + 3 = 27$





Correction

Niveau 2

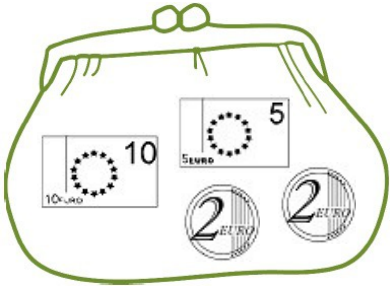


Acheter chez le marchand : calculer une somme d'argent (< 50), prévoir juste ce qu'il faut pour payer.

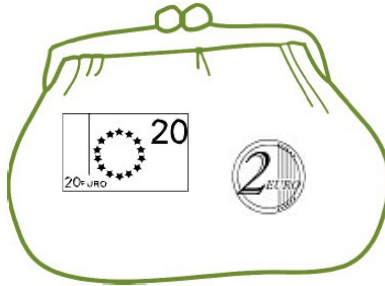
Série 3 : les friandises

Écris le calcul et dessine les billets et pièces.

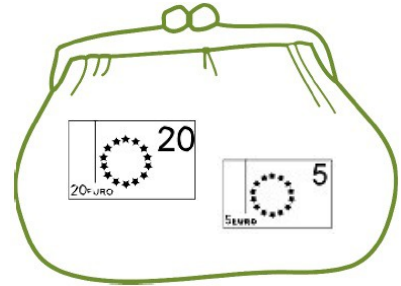
1 $6 + 6 + 7 = 19$



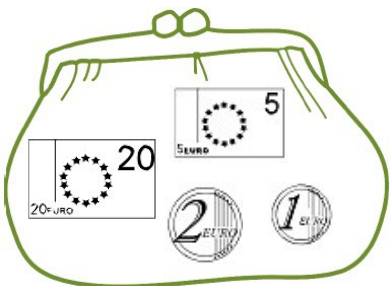
2 $7 + 7 + 8 = 22$



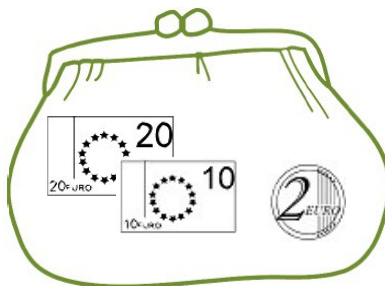
3 $8 + 8 + 9 = 25$




4 $9 + 9 + 5 + 5 = 28$



5 $12 + 8 + 12 = 32$




6 $4 + 4 + 4 + 3 + 3 + 3 = 21$



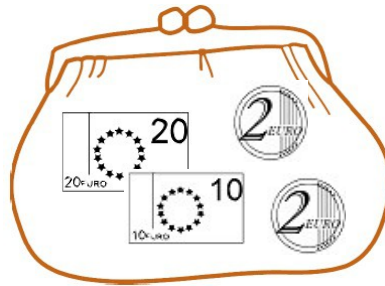
Série 4 : les fournitures scolaires

Écris le calcul et dessine les billets et pièces.

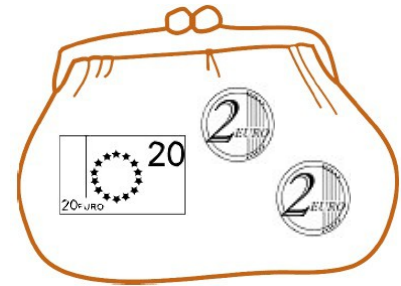
1 $2 + 3 + 2 + 3 + 2 + 3 + 2 + 3 = 20$



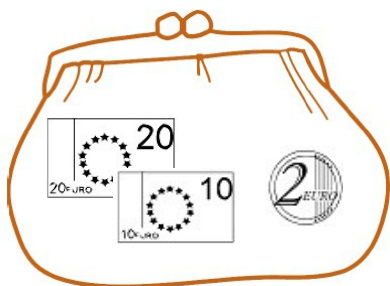
2 $12 + 3 + 15 + 4 = 34$



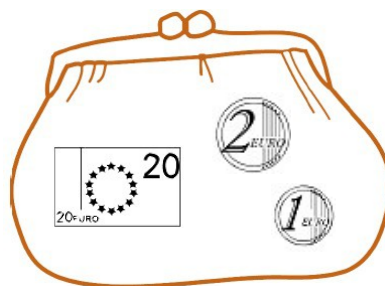
3 $6 + 6 + 6 + 6 = 24$



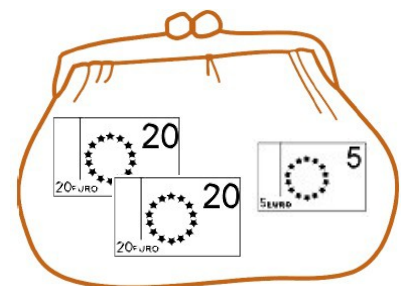
4 $8 + 2 + 15 + 5 + 2 = 32$



5 $6 + 4 + 8 + 5 = 23$



6 $15 + 15 + 15 = 45$





Correction

Niveau 2

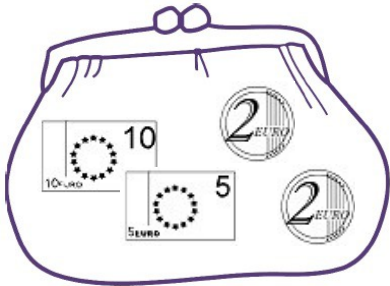


Acheter chez le marchand : calculer une somme d'argent (< 50), prévoir juste ce qu'il faut pour payer.

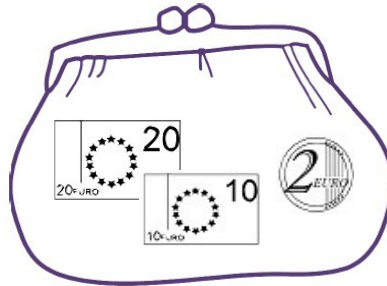
Série 5 : les légumes

Écris le calcul et dessine les billets et pièces.

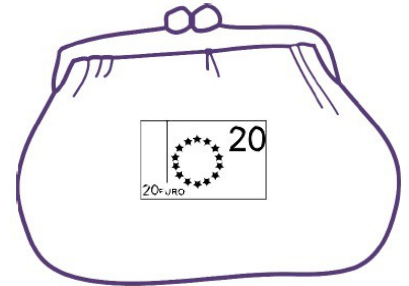
1 $8 + 8 + 3 = 19$



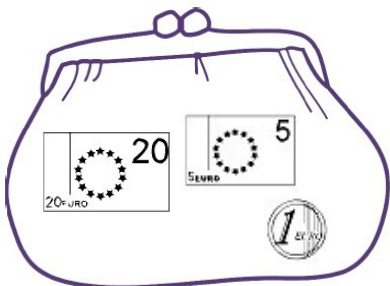
2 $11 + 9 + 12 = 32$



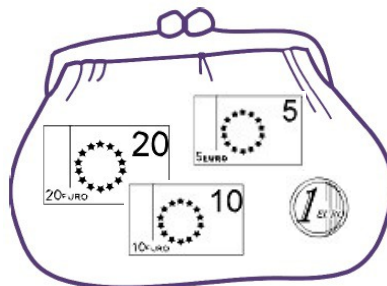
3 $5 + 5 + 5 + 5 = 20$



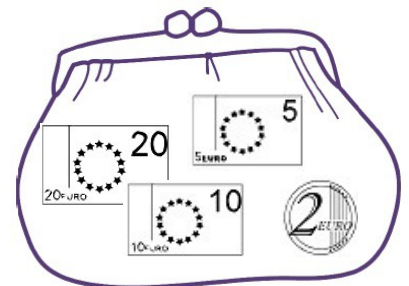
4 $7 + 7 + 12 = 26$



5 $12 + 8 + 16 = 36$



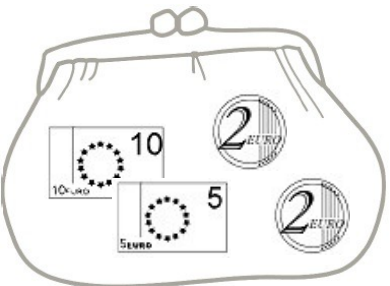
6 $7 + 3 + 16 + 11 = 37$



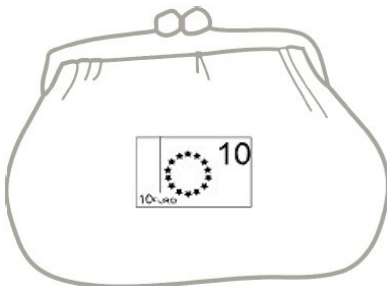
Série 6 : les boissons

Écris le calcul et dessine les billets et pièces.

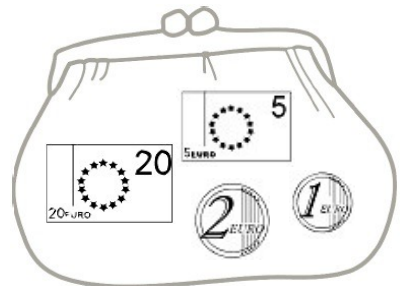
1 $5 + 5 + 5 + 4 = 19$



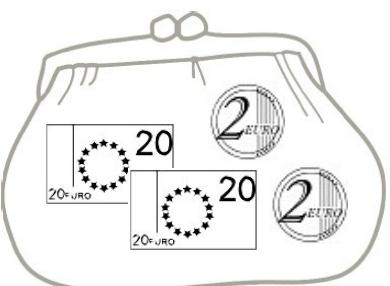
2 $3 + 3 + 2 + 2 = 10$



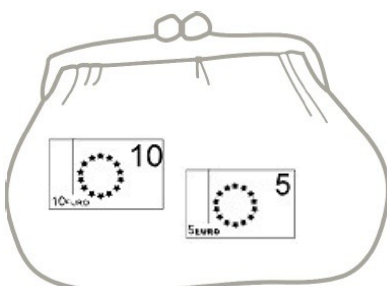
3 $7 + 7 + 6 + 4 + 4 = 28$



4 $11 + 11 + 11 + 11 = 44$



5 $11 + 1 + 1 + 1 + 1 = 15$



6 $7 + 3 + 11 + 6 + 3 = 30$

