



Prénom :

Niveau 1




Acheter chez le marchand : calculer une somme d'argent (< 20), prévoir juste ce qu'il faut pour payer.

Série 1 : les fruits

Écris le calcul et dessine les billets et pièces.


1




2




3




4



5




6



Série 2 : les chaussures

Écris le calcul et dessine les billets et pièces.


1



2



3



4



5



6





Prénom :

Niveau 1



Acheter chez le marchand : calculer une somme d'argent (< 20), prévoir juste ce qu'il faut pour payer.

Série 3 : les friandises

Écris le calcul et dessine les billets et pièces.

1



2



3



4



5



6



Série 4 : les fournitures scolaires

Écris le calcul et dessine les billets et pièces.

1



2



3



4



5



6





Prénom :

Niveau 1




Acheter chez le marchand : calculer une somme d'argent (< 20), prévoir juste ce qu'il faut pour payer.


Série 5 : les légumes

Écris le calcul et dessine les billets et pièces.


1




2




3




4



5



6



Série 6 : les boissons

Écris le calcul et dessine les billets et pièces.

1



2



3



4



5



6





Correction

Niveau 1




Acheter chez le marchand : calculer une somme d'argent (< 20), prévoir juste ce qu'il faut pour payer.

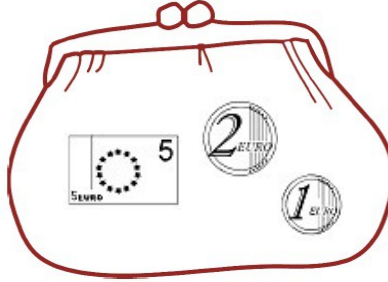
Série 1 : les fruits

Écris le calcul et dessine les billets et pièces.

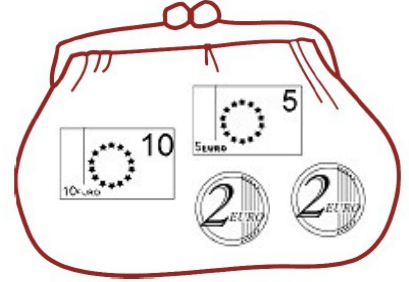
1 $5 + 4 = 9$



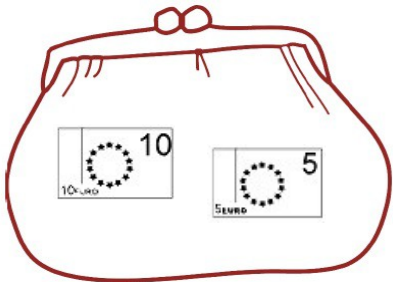
2 $6 + 2 = 8$



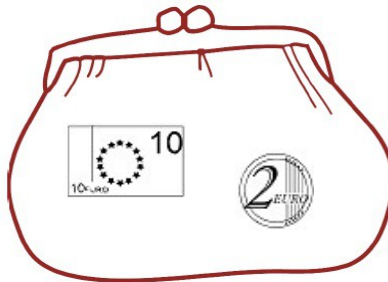
3 $10 + 9 = 19$



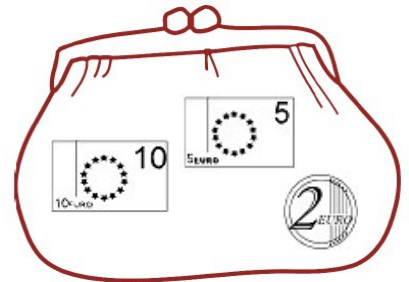
4 $8 + 7 = 15$



5 $6 + 4 + 2 = 12$



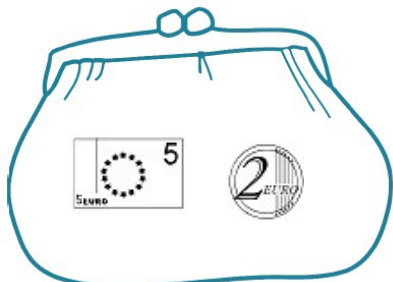
6 $8 + 2 + 7 = 17$



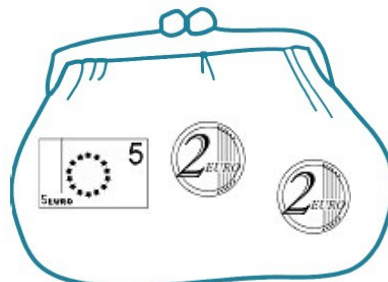
Série 2 : les chaussures

Écris le calcul et dessine les billets et pièces.

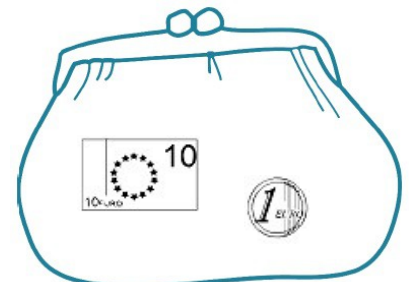
1 $4 + 3 = 7$



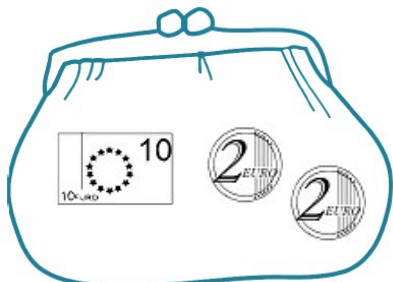
2 $7 + 2 = 9$



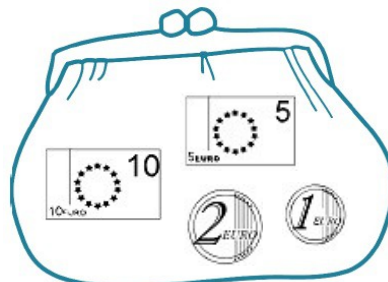
3 $10 + 1 = 11$



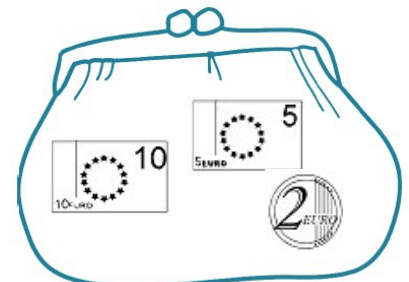
4 $8 + 6 = 14$



5 $7 + 3 + 8 = 18$



6 $6 + 4 + 7 = 17$





Correction

Niveau 1

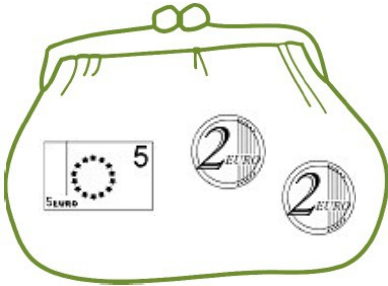


Acheter chez le marchand : calculer une somme d'argent (< 20), prévoir juste ce qu'il faut pour payer.

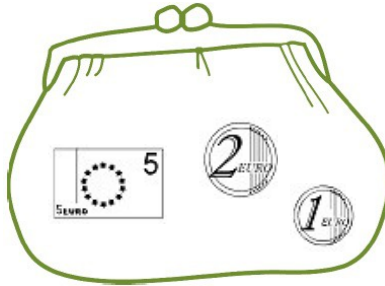
Série 3 : les friandises

Écris le calcul et dessine les billets et pièces.

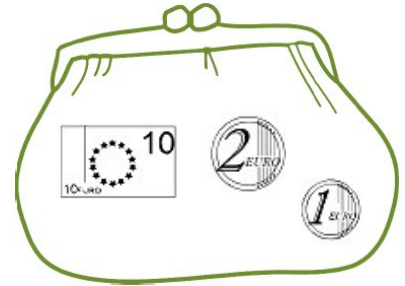
1 $6 + 3 = 9$



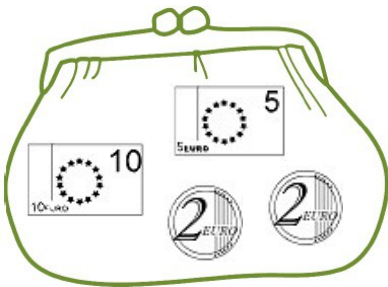
2 $5 + 3 = 8$



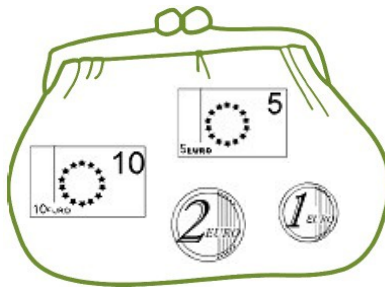
3 $9 + 4 = 13$



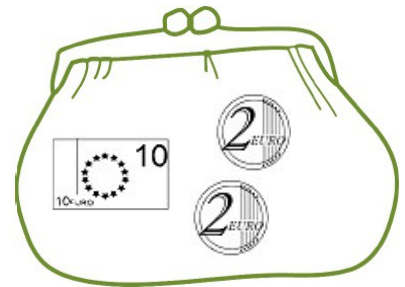
4 $12 + 7 = 19$



5 $5 + 5 + 8 = 18$



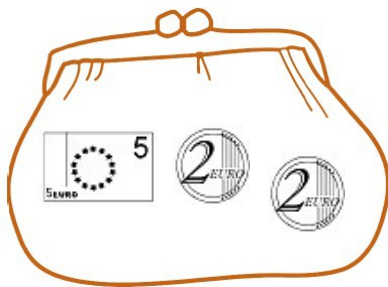
6 $4 + 6 + 4 = 14$



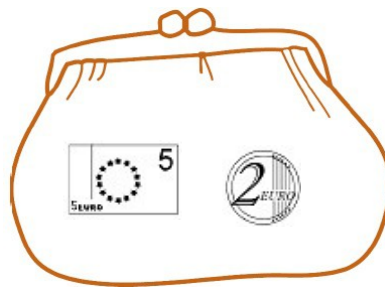
Série 4 : les fournitures scolaires

Écris le calcul et dessine les billets et pièces.

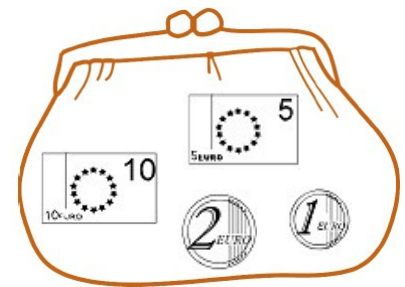
1 $4 + 2 + 3 = 9$




2 $5 + 2 = 7$



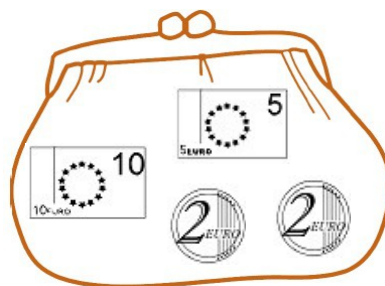
3 $12 + 6 = 18$



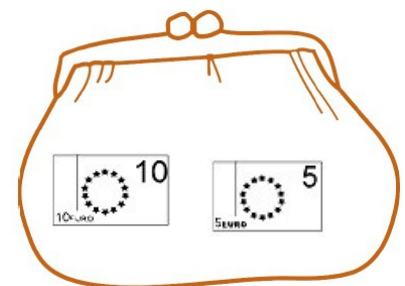
4 $8 + 5 = 13$



5 $15 + 4 = 19$



6 $8 + 2 + 5 = 15$



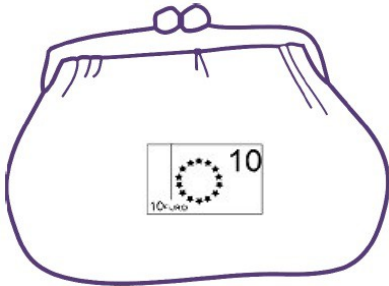


Acheter chez le marchand : calculer une somme d'argent (< 20), prévoir juste ce qu'il faut pour payer.

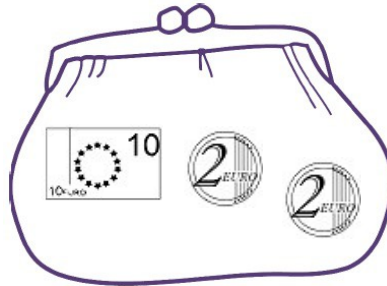
Série 5 : les légumes

Écris le calcul et dessine les billets et pièces.

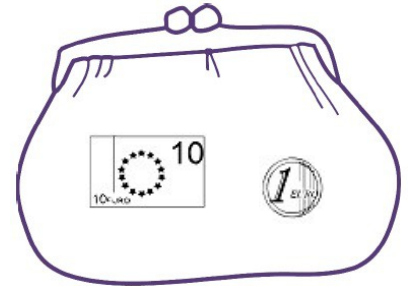
1 $7 + 3 = 10$



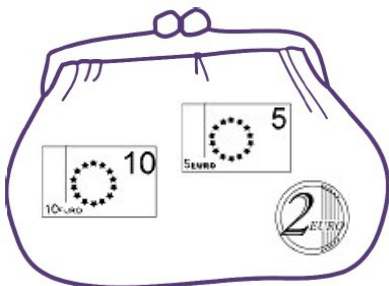
2 $9 + 5 = 14$



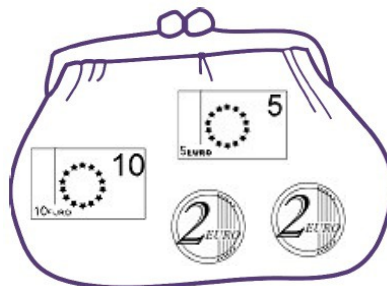
3 $3 + 8 = 11$



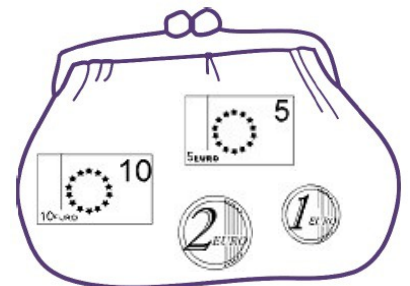
4 $12 + 5 = 17$



5 $16 + 3 = 19$



6 $11 + 7 = 18$



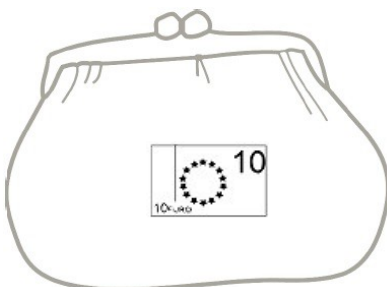
Série 6 : les boissons

Écris le calcul et dessine les billets et pièces.

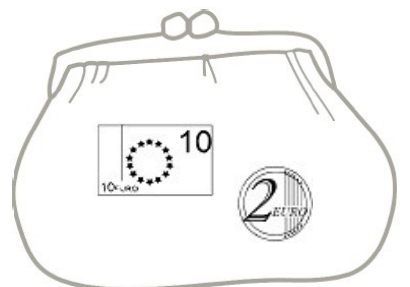
1 $4 + 1 + 2 = 7$



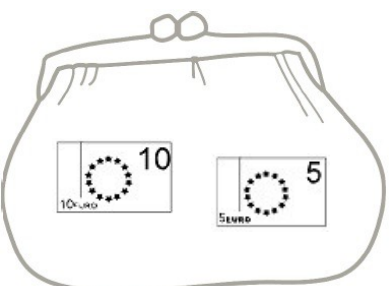
2 $5 + 2 + 3 = 10$



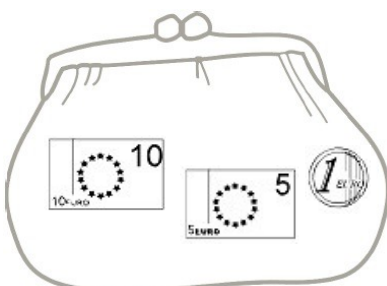
3 $3 + 7 + 2 = 12$



4 $4 + 6 + 5 = 15$



5 $11 + 2 + 3 = 16$



6 $4 + 4 + 6 + 5 = 19$

